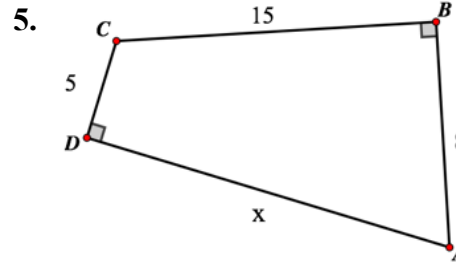
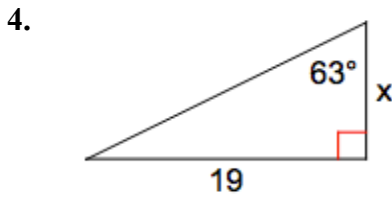
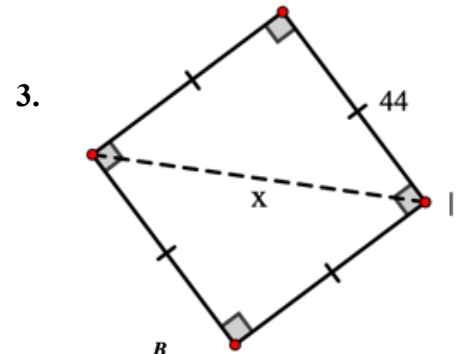
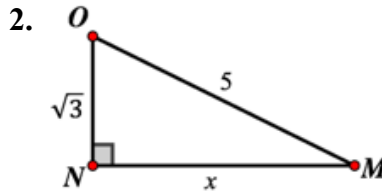
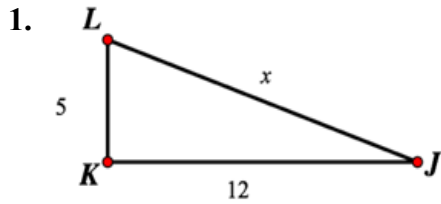


Geometry 4c: Finding Side Lengths
Homework #2

Name _____
 Pd _____ Date _____

Determine the unknown length of each figure.



Determine if the side lengths form a right triangle.

4. $3\sqrt{7}$ cm, 9 cm, 12 cm

5. $\sqrt{82}$ km, $\sqrt{114}$ km, 14 km

6. $3\sqrt{15}$ yd, 11 yd, 19 yd

7. Use the Pythagorean theorem to find the distance from Hilo (A) to Honolulu (C). Then, determine the actual distance between Hilo and Honolulu using the map scale.

