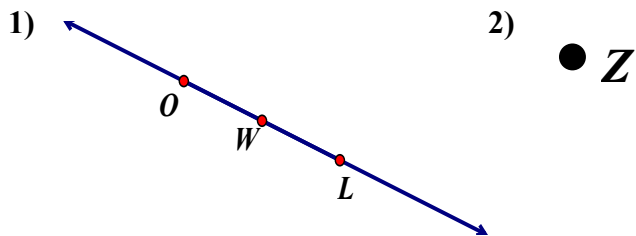


Geometry 1b: Lines & Segments

Homework #2

***REMEMBER to do in Power Homework Format!!!**

In 1–2, state what it is, and denote it using proper notation.



In 5–7, use the figure to the right.

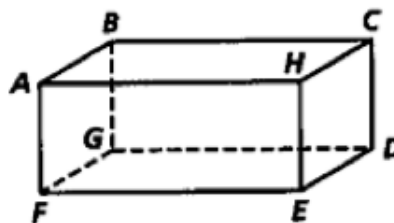
- 5) Are A , B , and G coplanar?
- 6) Name two pairs of collinear points.
- 7) Are C , H , and E collinear? Are they coplanar?
- 8) \overline{TV} and \overline{UW} bisect each other at point Z . If $TZ = 4x - 16$ and $VZ = 2x + 6$, find TV .

Name _____

Per _____ Date _____

In 3–5, draw a diagram that fits the description.

- 3) \overleftrightarrow{QT}
- 4) \overleftrightarrow{MP} bisecting \overline{SK} at point J

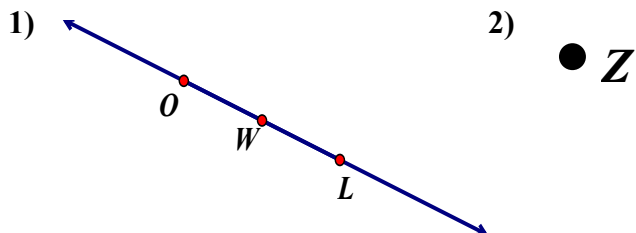


Geometry 1b: Lines & Segments

Homework #2

***REMEMBER to do in Power Homework Format!!!**

In 1–2, state what it is, and denote it using proper notation.



In 5–7, use the figure to the right.

- 5) Are A , B , and G coplanar?
- 6) Name two pairs of collinear points.
- 7) Are C , H , and E collinear? Are they coplanar?
- 8) \overline{TV} and \overline{UW} bisect each other at point Z . If $TZ = 4x - 16$ and $VZ = 2x + 6$, find TV .

Name _____

Per _____ Date _____

In 3–5, draw a diagram that fits the description.

- 3) \overleftrightarrow{QT}
- 4) \overleftrightarrow{MP} bisecting \overline{SK} at point J

